

name

date

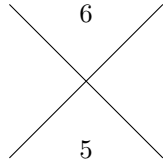
period

Batch 504f5070

Criss Cross Game

Version 1

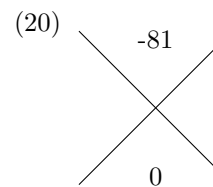
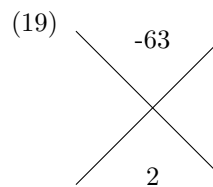
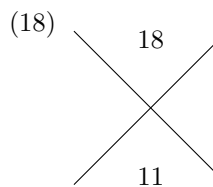
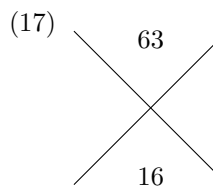
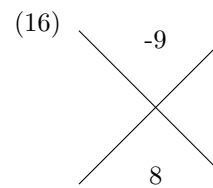
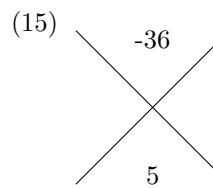
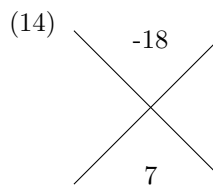
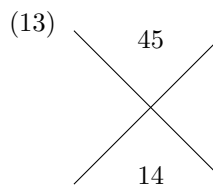
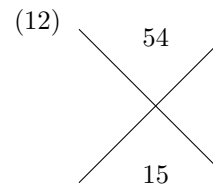
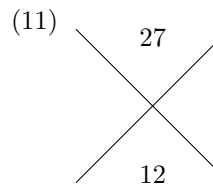
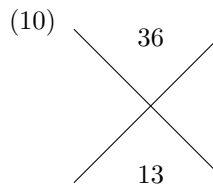
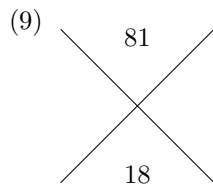
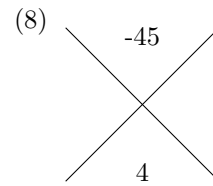
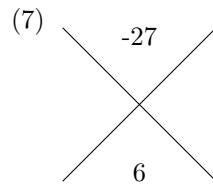
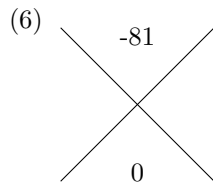
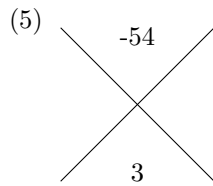
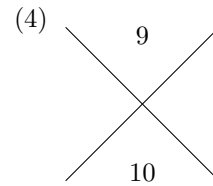
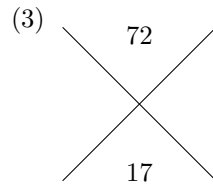
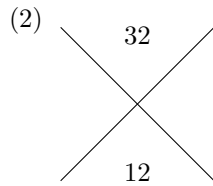
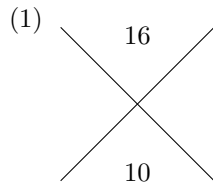
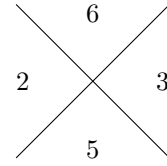
Example



Find two numbers whose product equals the top and whose sum equals the bottom.

$$2 \times 3 = 6$$

$$2 + 3 = 5$$



name

date

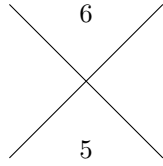
period

Batch 504f5070

Criss Cross Game

Version 2

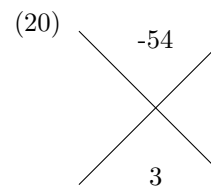
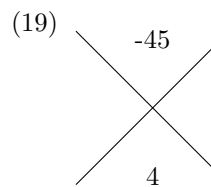
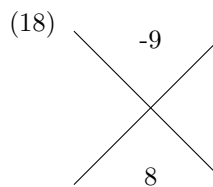
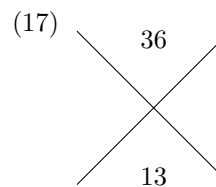
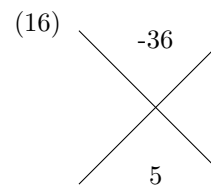
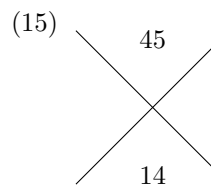
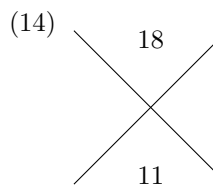
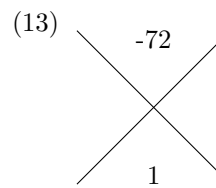
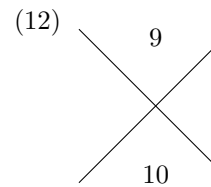
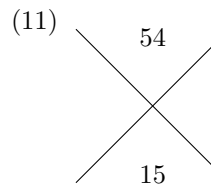
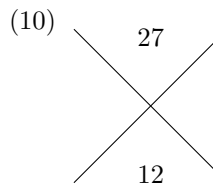
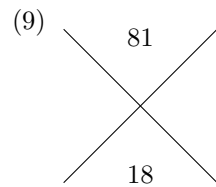
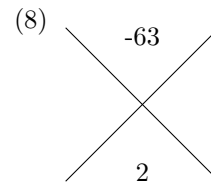
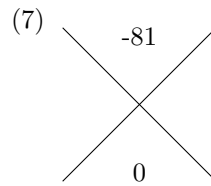
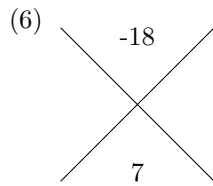
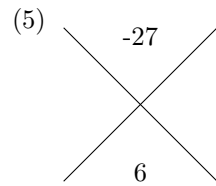
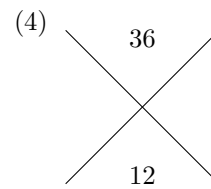
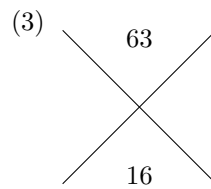
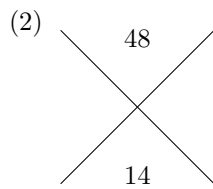
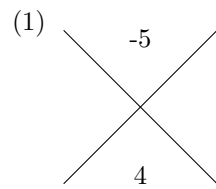
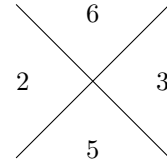
Example



Find two numbers whose product equals the top and whose sum equals the bottom.

$$2 \times 3 = 6$$

$$2 + 3 = 5$$



name

date

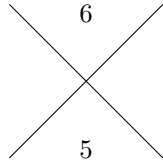
period

Batch 504f5070

Criss Cross Game

Version 3

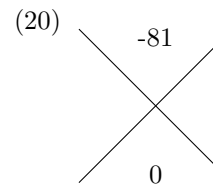
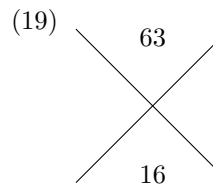
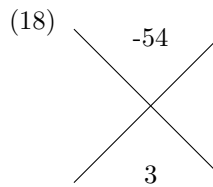
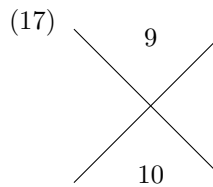
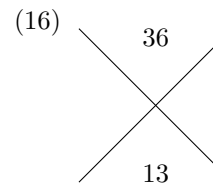
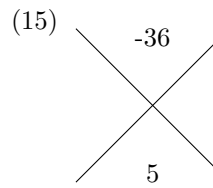
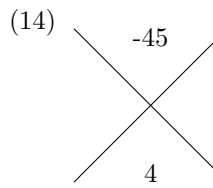
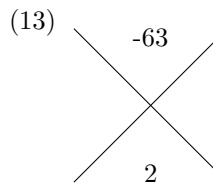
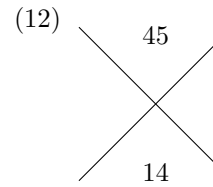
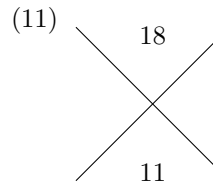
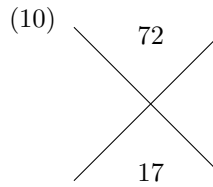
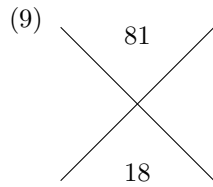
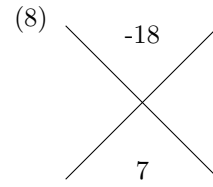
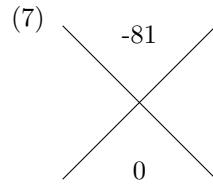
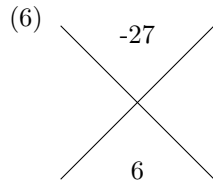
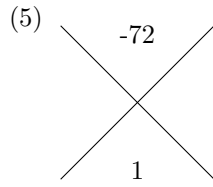
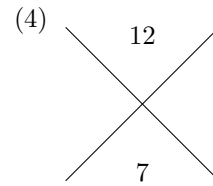
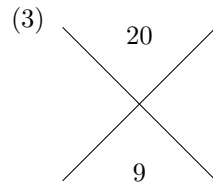
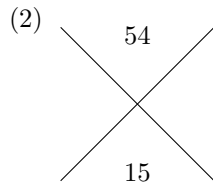
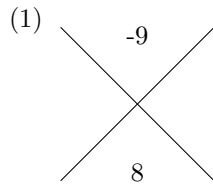
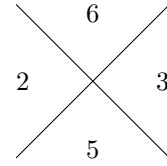
Example



Find two numbers whose product equals the top and whose sum equals the bottom.

$$2 \times 3 = 6$$

$$2 + 3 = 5$$



name

date

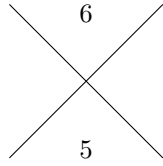
period

Batch 504f5070

Criss Cross Game

Version 4

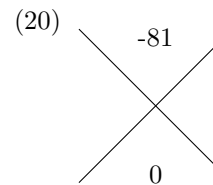
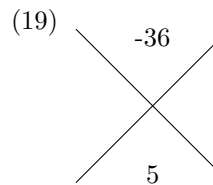
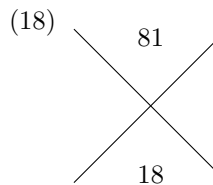
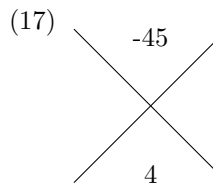
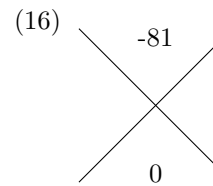
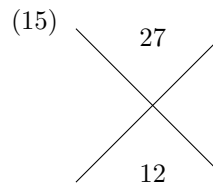
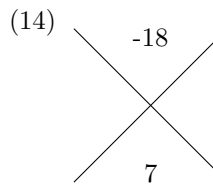
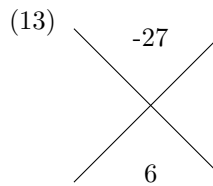
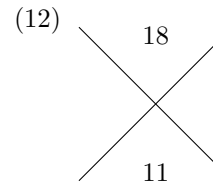
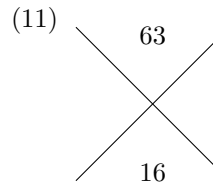
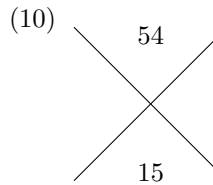
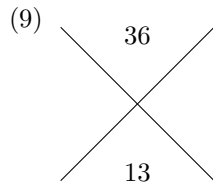
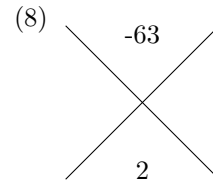
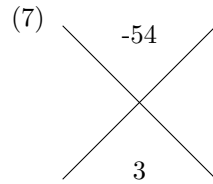
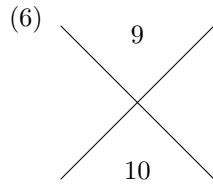
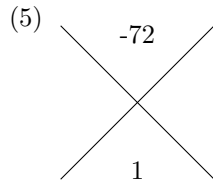
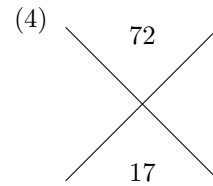
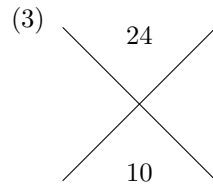
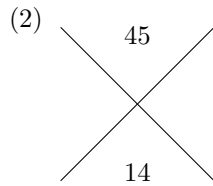
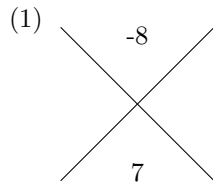
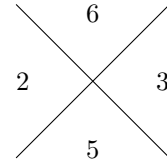
Example



Find two numbers whose product equals the top and whose sum equals the bottom.

$$2 \times 3 = 6$$

$$2 + 3 = 5$$



name

date

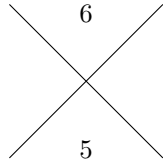
period

Batch 504f5070

Criss Cross Game

Version 5

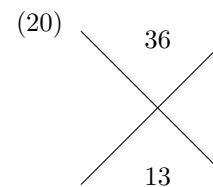
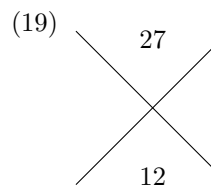
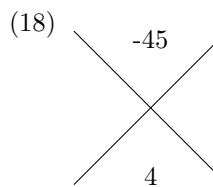
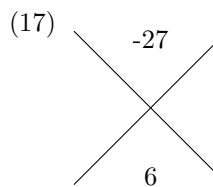
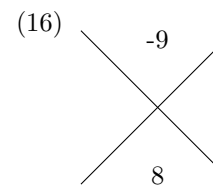
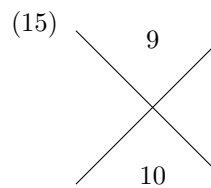
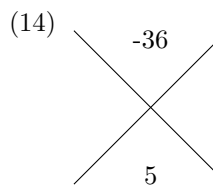
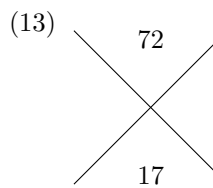
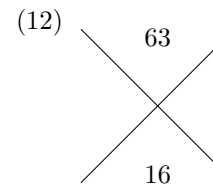
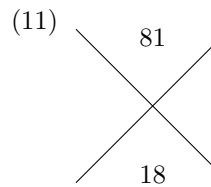
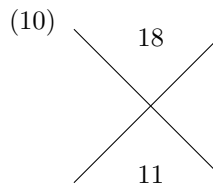
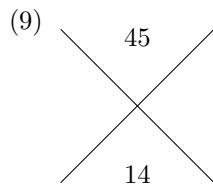
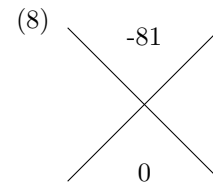
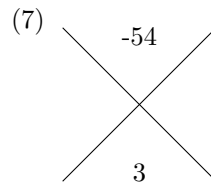
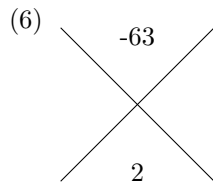
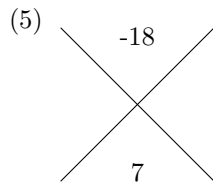
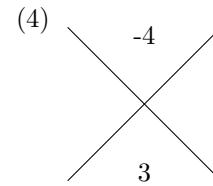
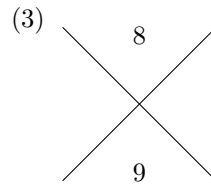
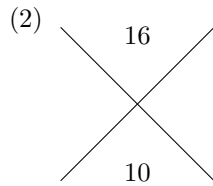
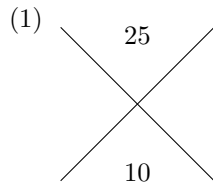
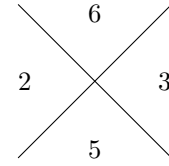
Example



Find two numbers whose product equals the top and whose sum equals the bottom.

$$2 \times 3 = 6$$

$$2 + 3 = 5$$



name

date

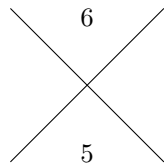
period

Batch 504f5070

Criss Cross Game

Version 6

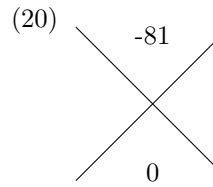
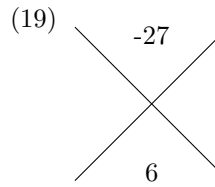
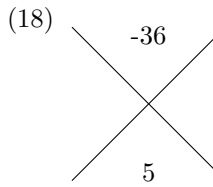
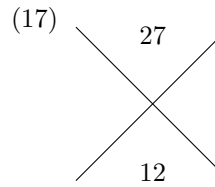
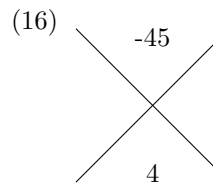
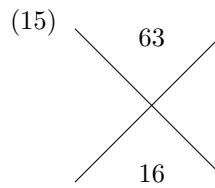
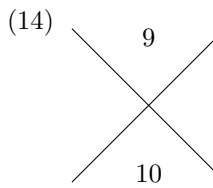
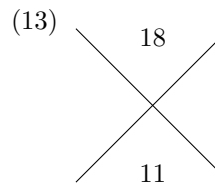
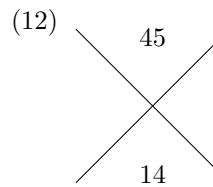
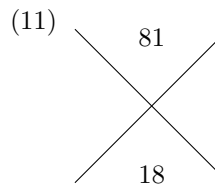
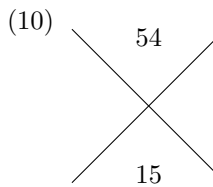
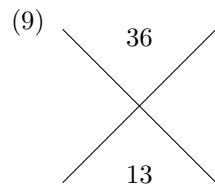
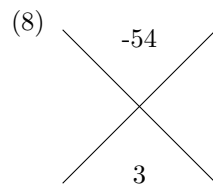
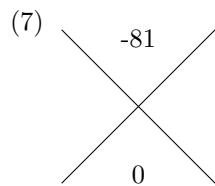
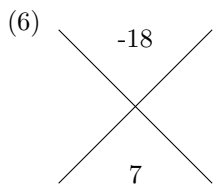
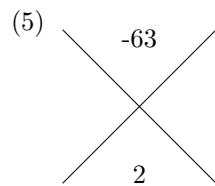
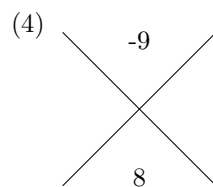
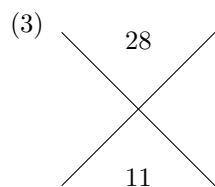
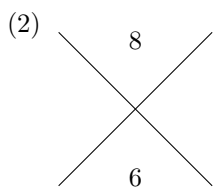
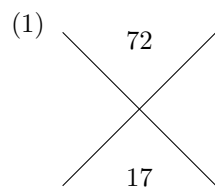
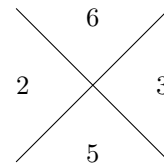
Example



Find two numbers whose product equals the top and whose sum equals the bottom.

$$2 \times 3 = 6$$

$$2 + 3 = 5$$



name

date

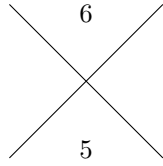
period

Batch 504f5070

Criss Cross Game

Version 7

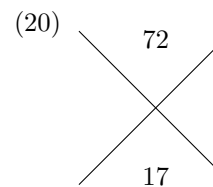
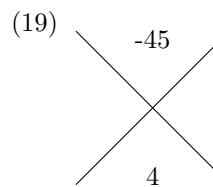
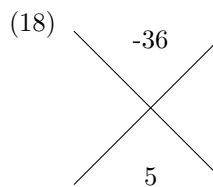
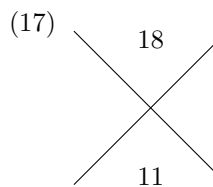
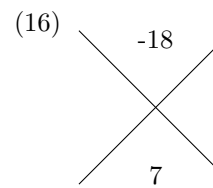
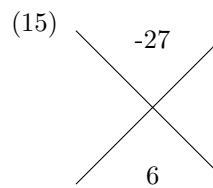
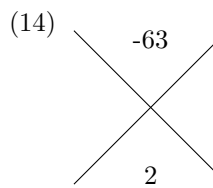
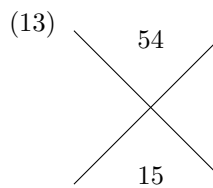
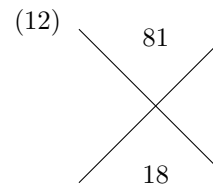
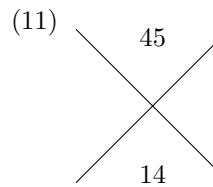
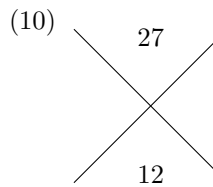
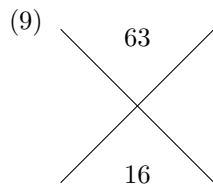
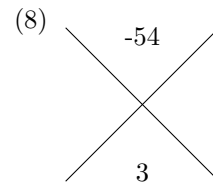
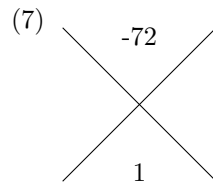
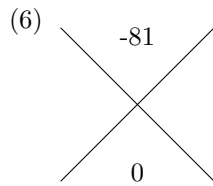
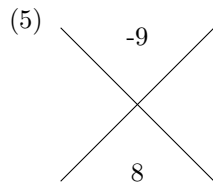
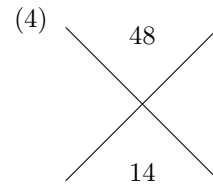
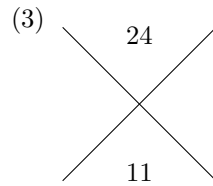
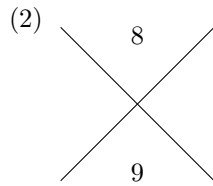
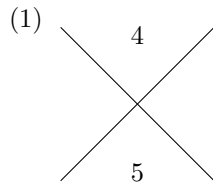
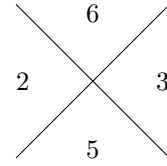
Example



Find two numbers whose product equals the top and whose sum equals the bottom.

$$2 \times 3 = 6$$

$$2 + 3 = 5$$



name

date

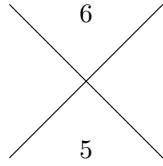
period

Batch 504f5070

Criss Cross Game

Version 8

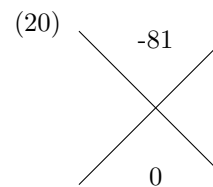
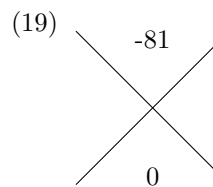
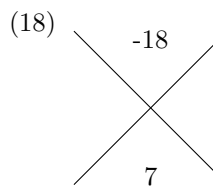
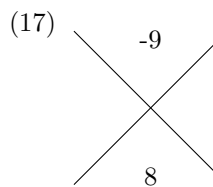
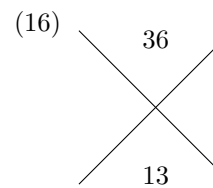
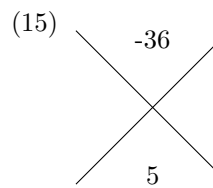
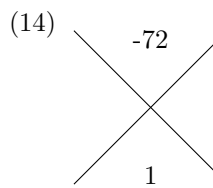
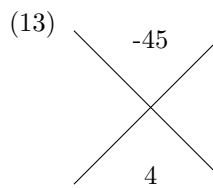
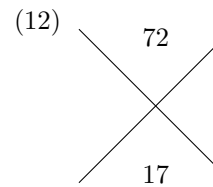
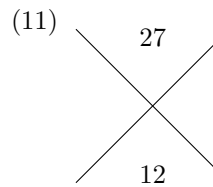
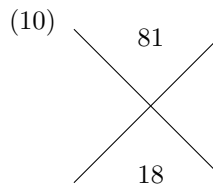
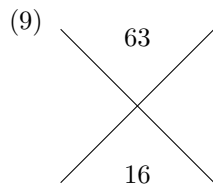
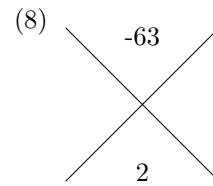
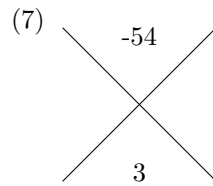
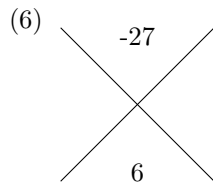
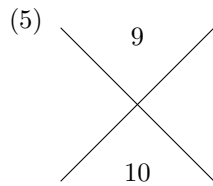
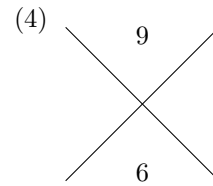
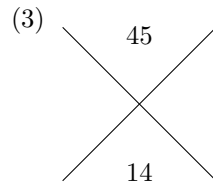
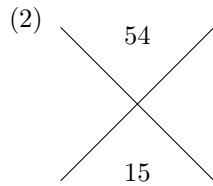
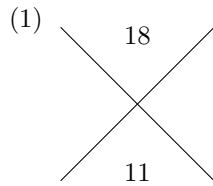
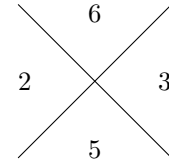
Example



Find two numbers whose product equals the top and whose sum equals the bottom.

$$2 \times 3 = 6$$

$$2 + 3 = 5$$



name

date

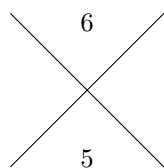
period

Batch 504f5070

Criss Cross Game

Version 9

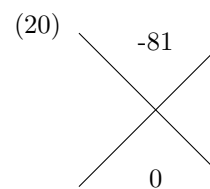
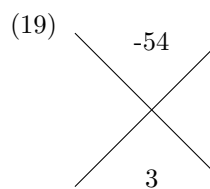
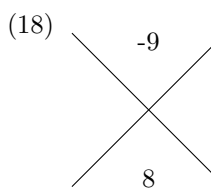
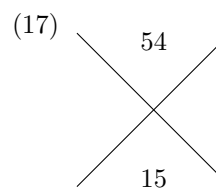
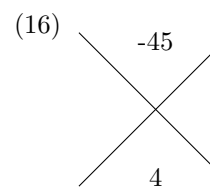
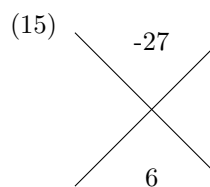
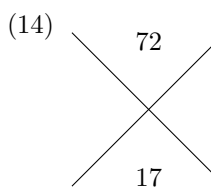
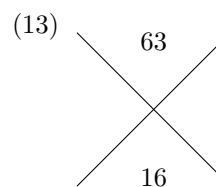
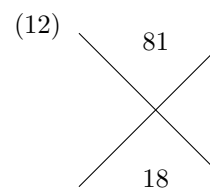
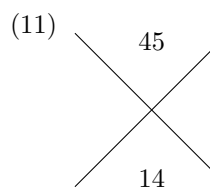
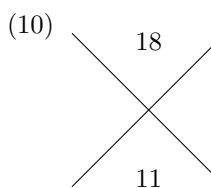
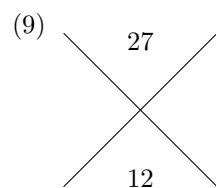
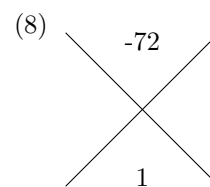
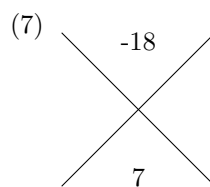
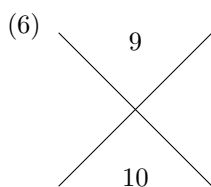
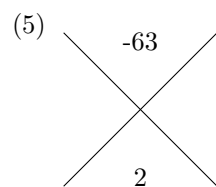
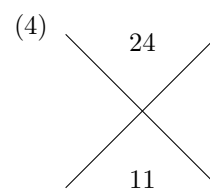
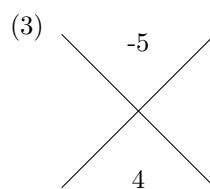
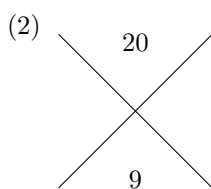
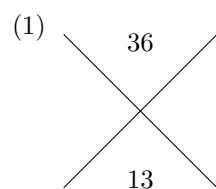
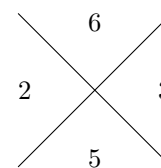
Example



Find two numbers whose product equals the top and whose sum equals the bottom.

$$2 \times 3 = 6$$

$$2 + 3 = 5$$



name

date

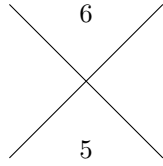
period

Batch 504f5070

Criss Cross Game

Version 10

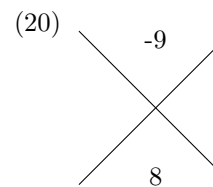
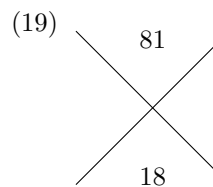
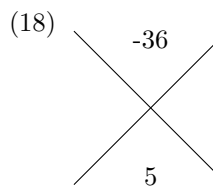
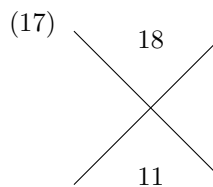
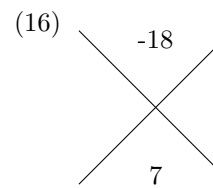
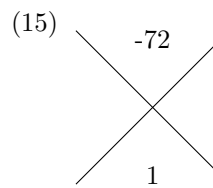
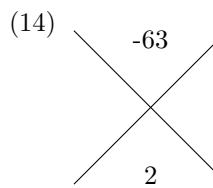
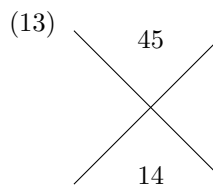
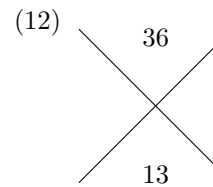
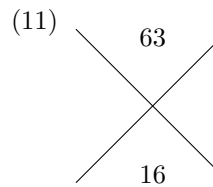
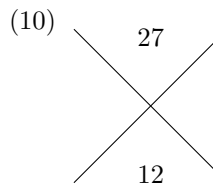
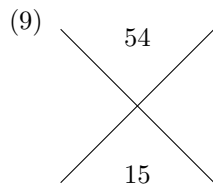
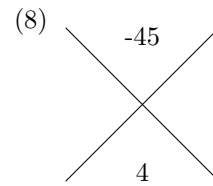
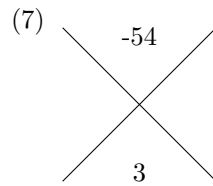
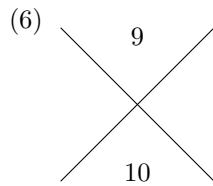
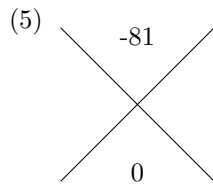
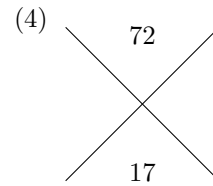
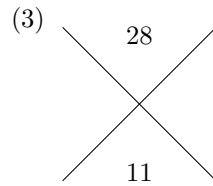
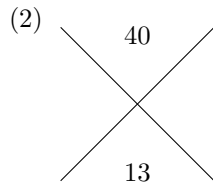
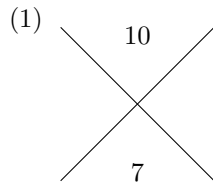
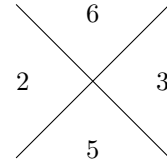
Example



Find two numbers whose product equals the top and whose sum equals the bottom.

$$2 \times 3 = 6$$

$$2 + 3 = 5$$



name

date

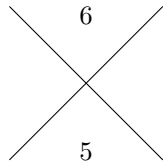
period

Batch 504f5070

Criss Cross Game

Version 11

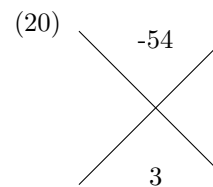
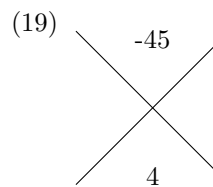
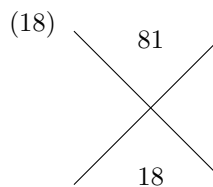
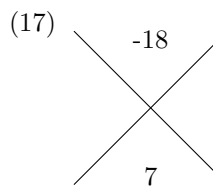
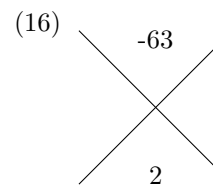
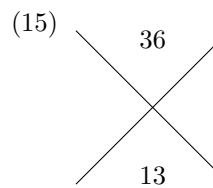
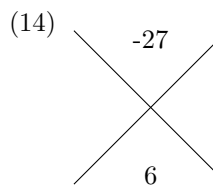
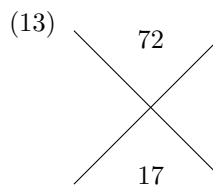
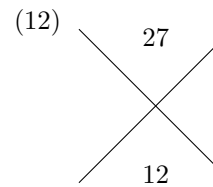
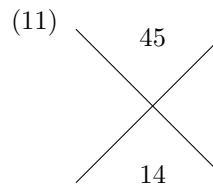
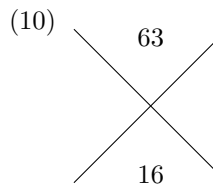
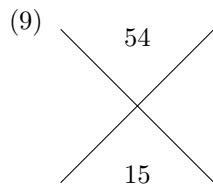
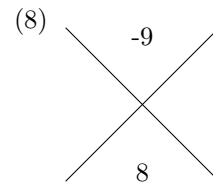
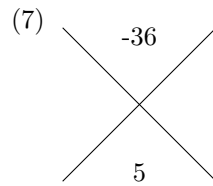
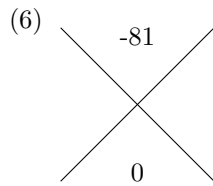
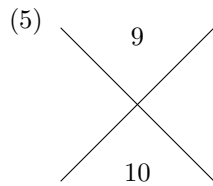
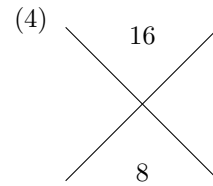
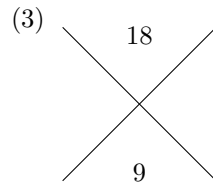
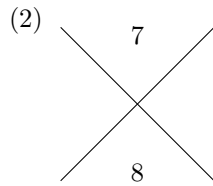
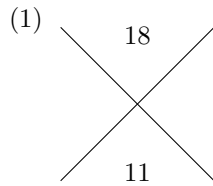
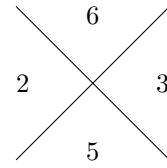
Example



Find two numbers whose product equals the top and whose sum equals the bottom.

$$2 \times 3 = 6$$

$$2 + 3 = 5$$



name

date

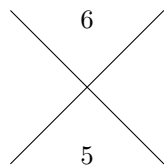
period

Batch 504f5070

Criss Cross Game

Version 12

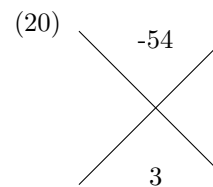
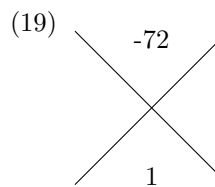
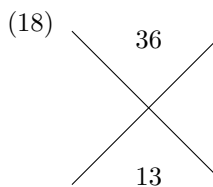
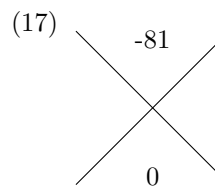
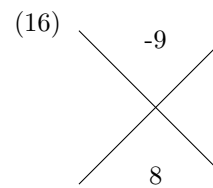
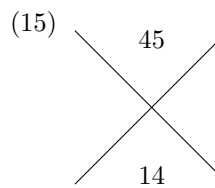
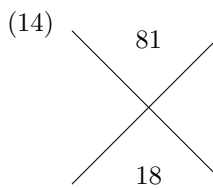
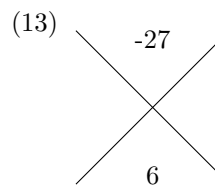
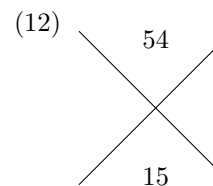
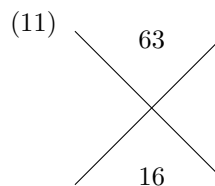
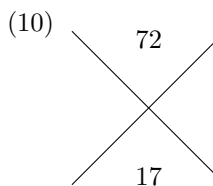
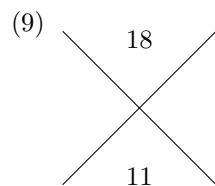
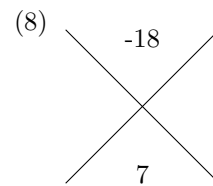
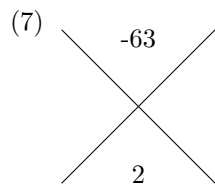
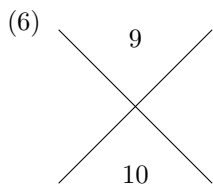
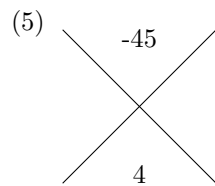
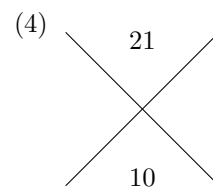
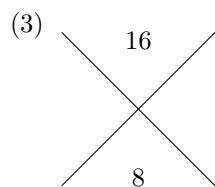
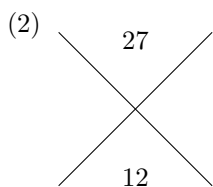
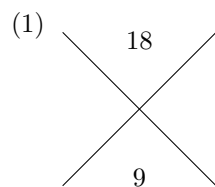
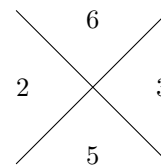
Example



Find two numbers whose product equals the top and whose sum equals the bottom.

$$2 \times 3 = 6$$

$$2 + 3 = 5$$



name

date

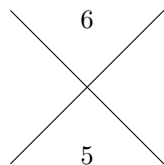
period

Batch 504f5070

Criss Cross Game

Version 13

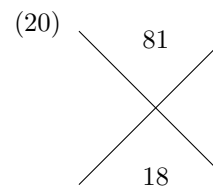
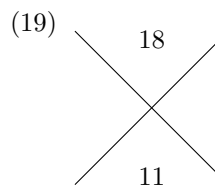
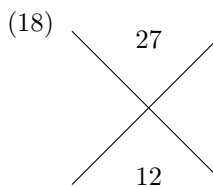
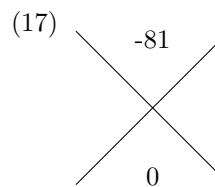
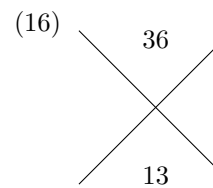
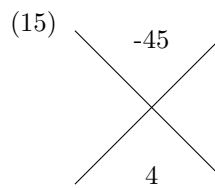
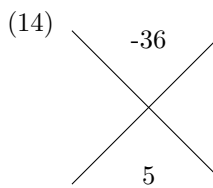
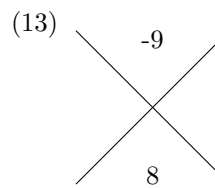
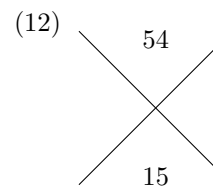
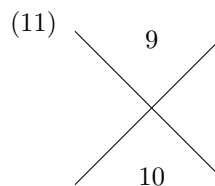
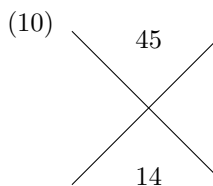
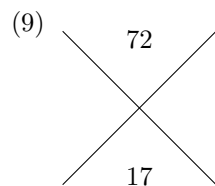
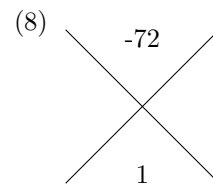
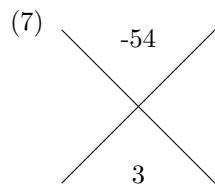
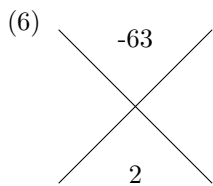
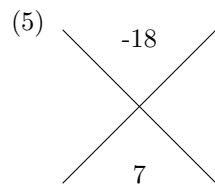
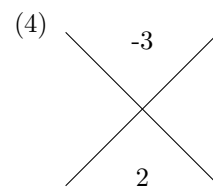
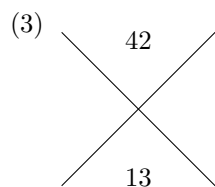
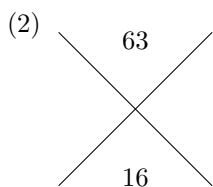
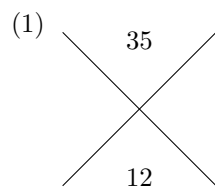
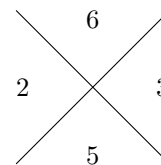
Example



Find two numbers whose product equals the top and whose sum equals the bottom.

$$2 \times 3 = 6$$

$$2 + 3 = 5$$



name

date

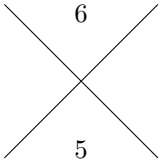
period

Batch 504f5070

Criss Cross Game

Version 14

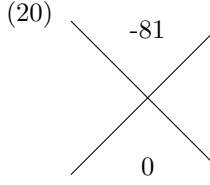
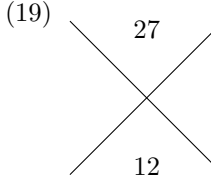
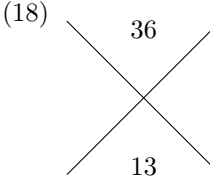
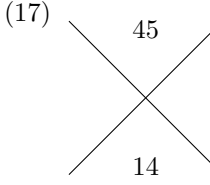
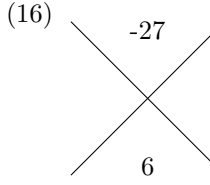
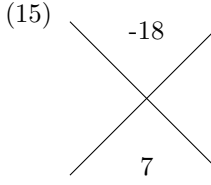
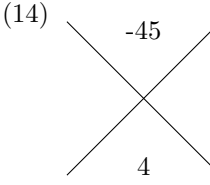
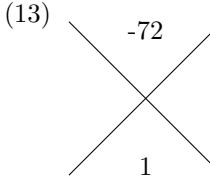
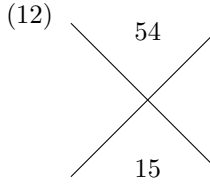
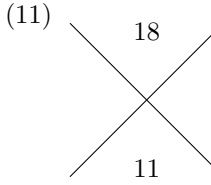
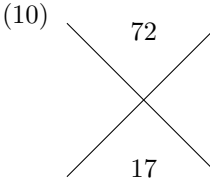
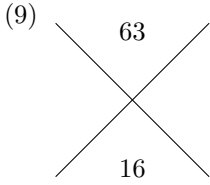
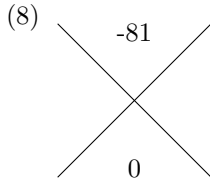
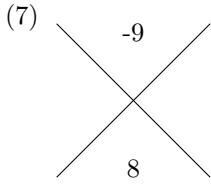
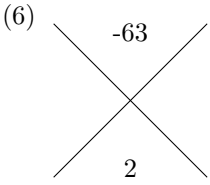
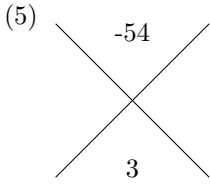
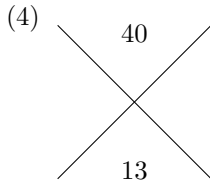
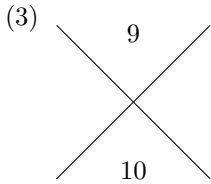
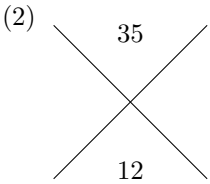
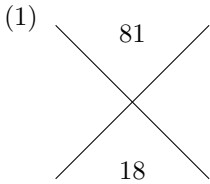
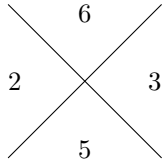
Example



Find two numbers whose product equals the top and whose sum equals the bottom.

$$2 \times 3 = 6$$

$$2 + 3 = 5$$



name

date

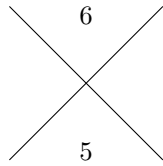
period

Batch 504f5070

Criss Cross Game

Version 15

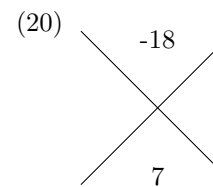
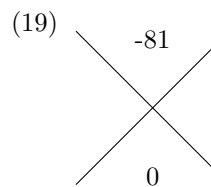
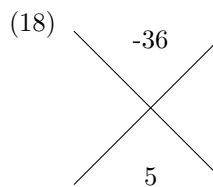
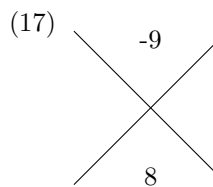
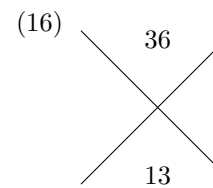
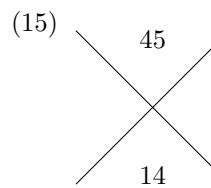
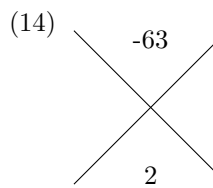
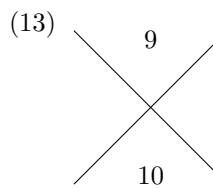
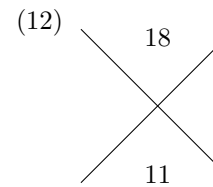
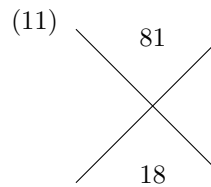
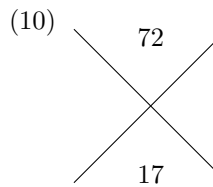
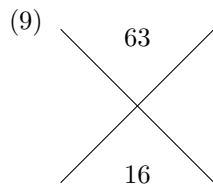
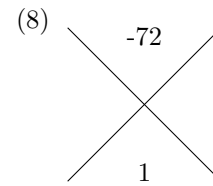
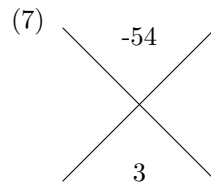
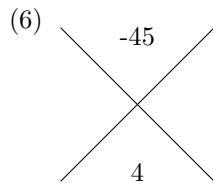
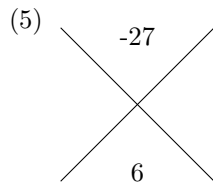
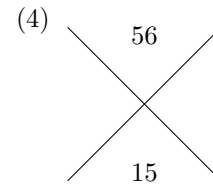
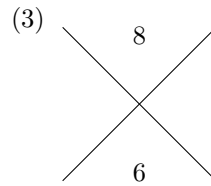
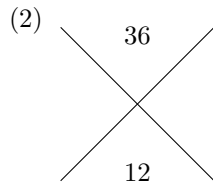
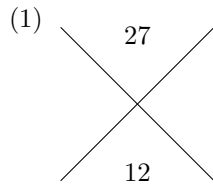
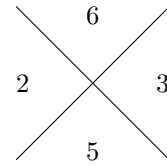
Example



Find two numbers whose product equals the top and whose sum equals the bottom.

$$2 \times 3 = 6$$

$$2 + 3 = 5$$



name

date

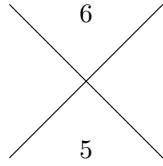
period

Batch 504f5070

Criss Cross Game

Version 16

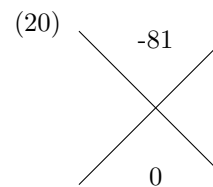
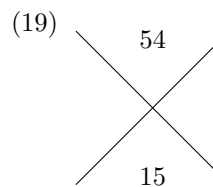
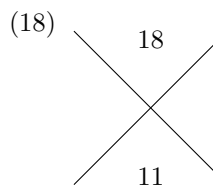
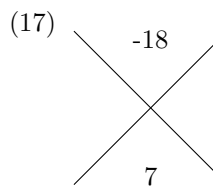
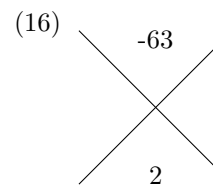
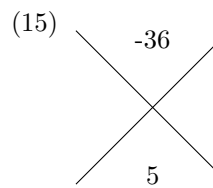
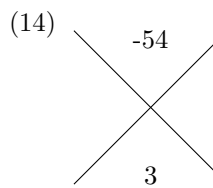
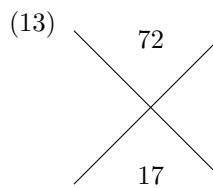
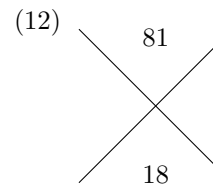
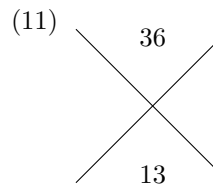
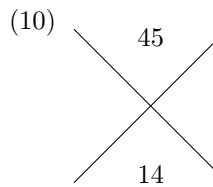
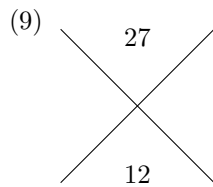
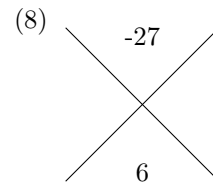
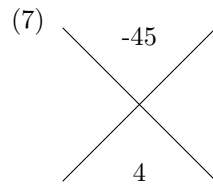
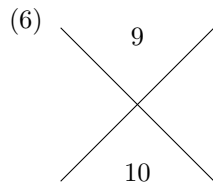
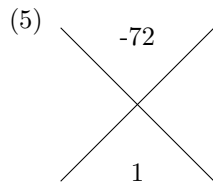
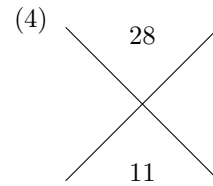
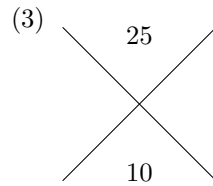
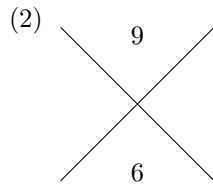
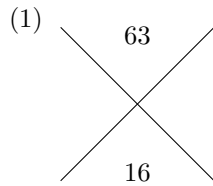
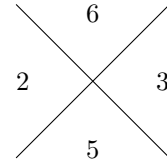
Example



Find two numbers whose product equals the top and whose sum equals the bottom.

$$2 \times 3 = 6$$

$$2 + 3 = 5$$



name

date

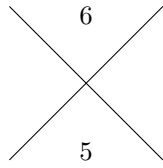
period

Batch 504f5070

Criss Cross Game

Version 17

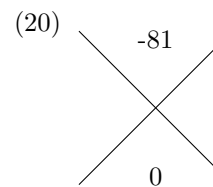
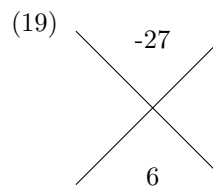
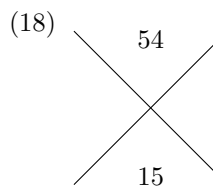
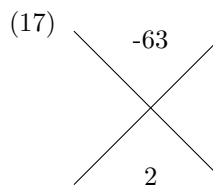
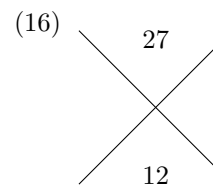
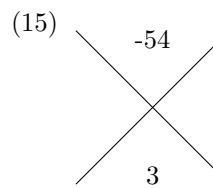
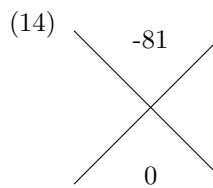
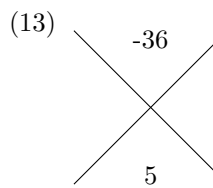
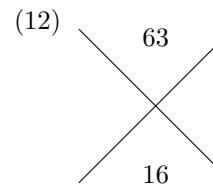
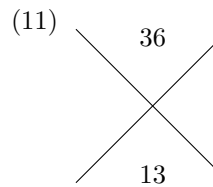
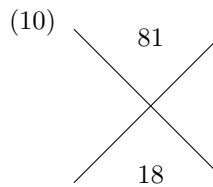
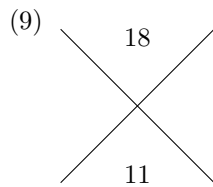
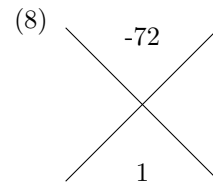
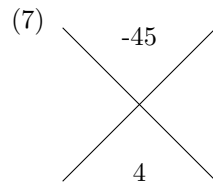
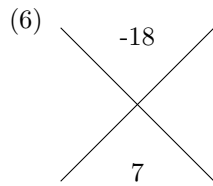
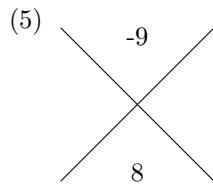
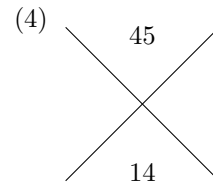
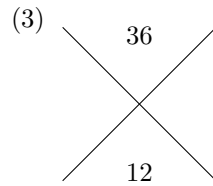
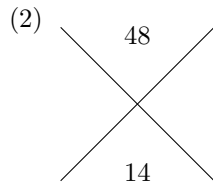
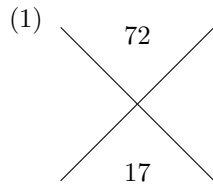
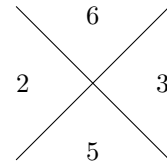
Example



Find two numbers whose product equals the top and whose sum equals the bottom.

$$2 \times 3 = 6$$

$$2 + 3 = 5$$



name

date

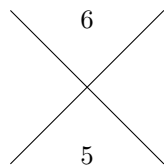
period

Batch 504f5070

Criss Cross Game

Version 18

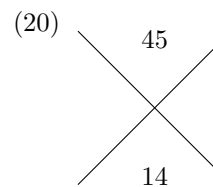
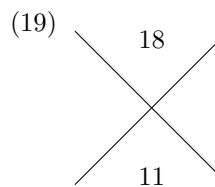
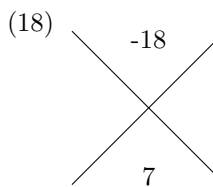
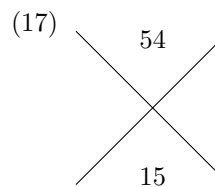
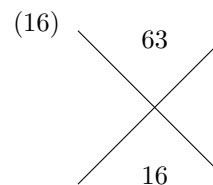
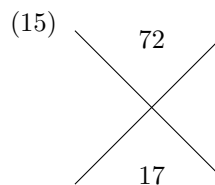
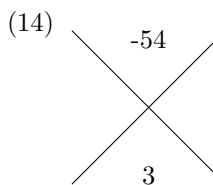
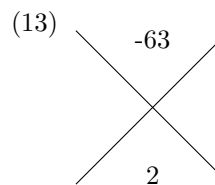
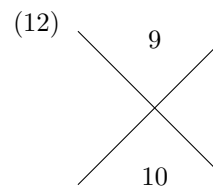
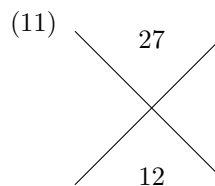
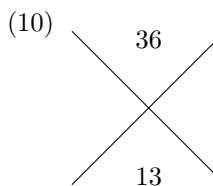
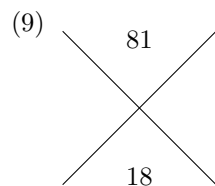
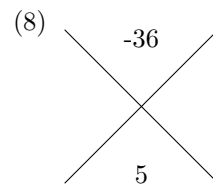
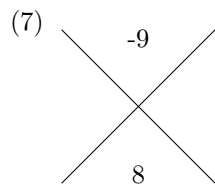
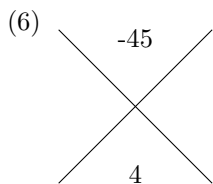
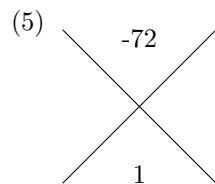
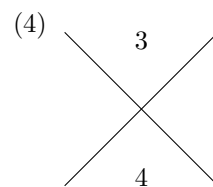
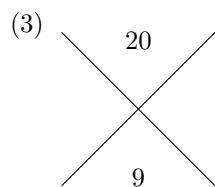
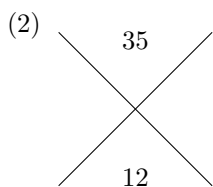
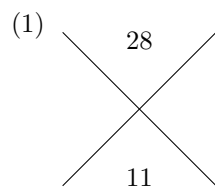
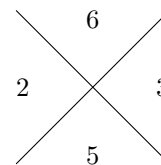
Example



Find two numbers whose product equals the top and whose sum equals the bottom.

$$2 \times 3 = 6$$

$$2 + 3 = 5$$



name

date

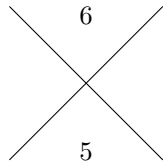
period

Batch 504f5070

Criss Cross Game

Version 19

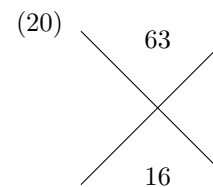
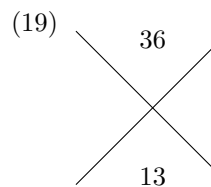
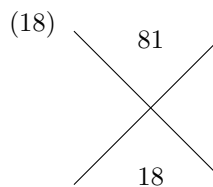
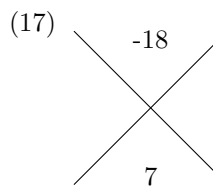
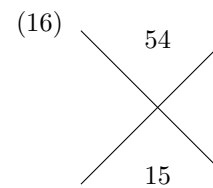
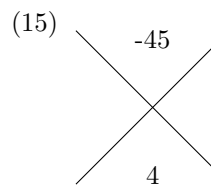
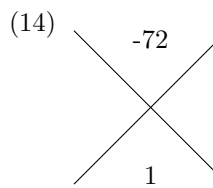
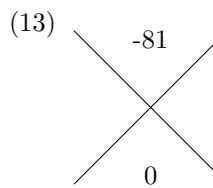
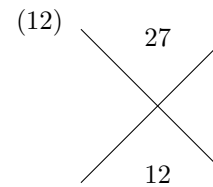
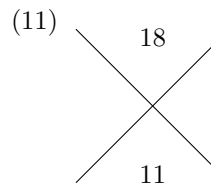
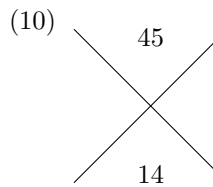
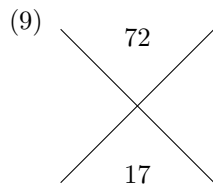
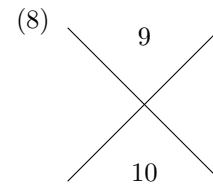
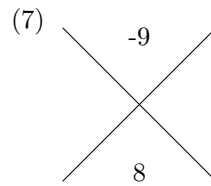
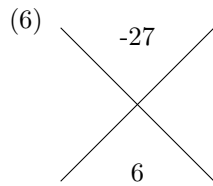
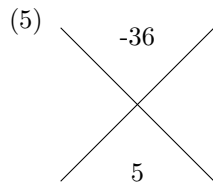
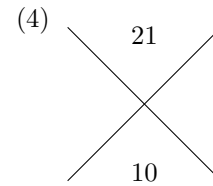
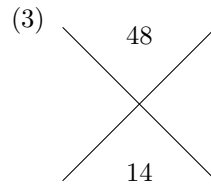
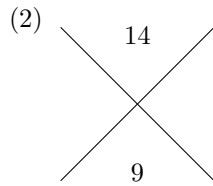
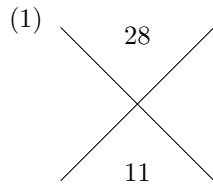
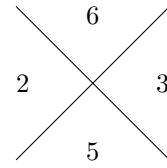
Example



Find two numbers whose product equals the top and whose sum equals the bottom.

$$2 \times 3 = 6$$

$$2 + 3 = 5$$



name

date

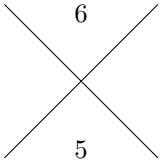
period

Batch 504f5070

Criss Cross Game

Version 20

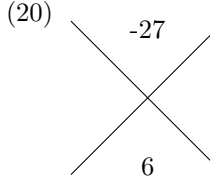
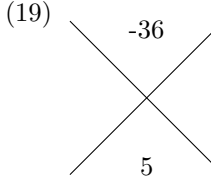
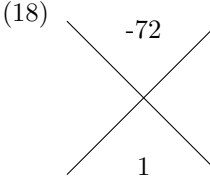
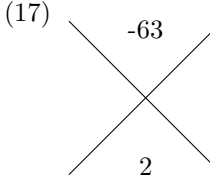
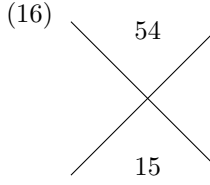
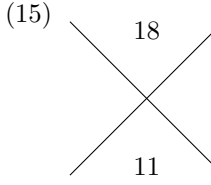
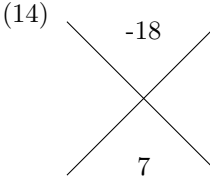
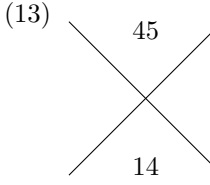
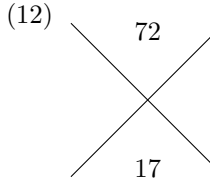
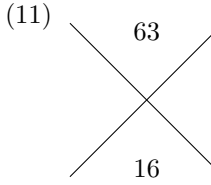
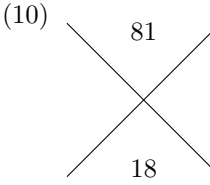
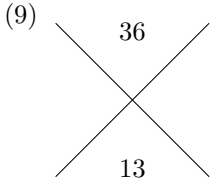
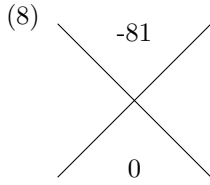
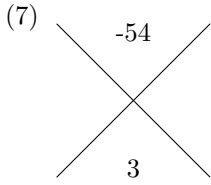
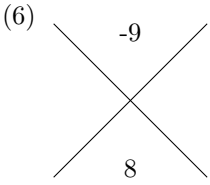
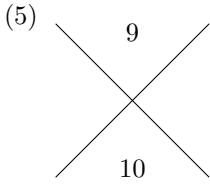
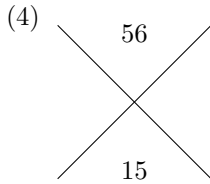
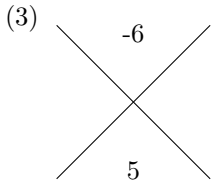
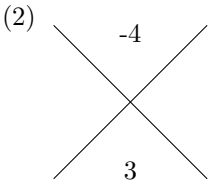
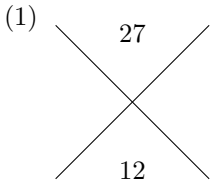
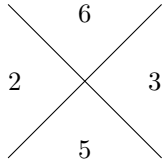
Example



Find two numbers whose product equals the top and whose sum equals the bottom.

$$2 \times 3 = 6$$

$$2 + 3 = 5$$



name

date

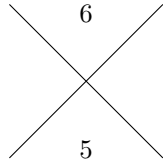
period

Batch 504f5070

Criss Cross Game

Version 21

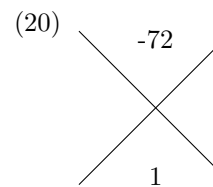
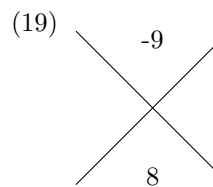
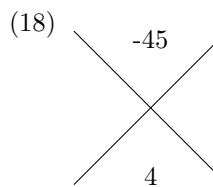
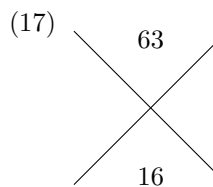
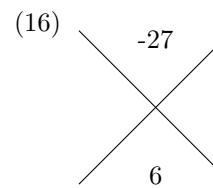
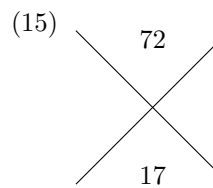
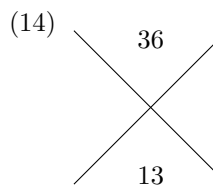
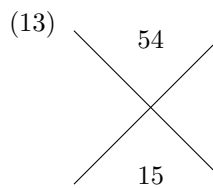
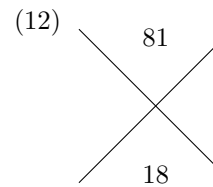
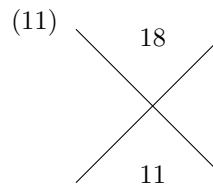
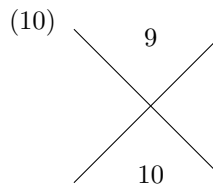
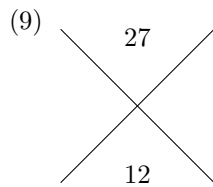
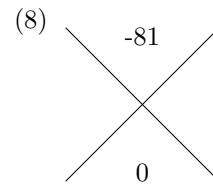
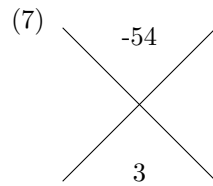
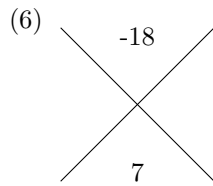
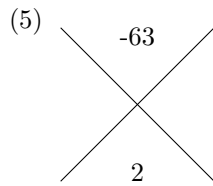
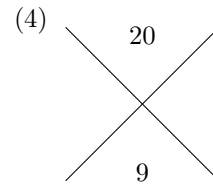
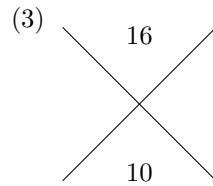
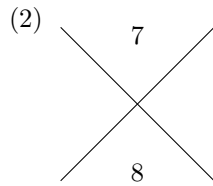
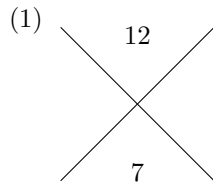
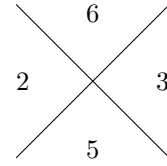
Example



Find two numbers whose product equals the top and whose sum equals the bottom.

$$2 \times 3 = 6$$

$$2 + 3 = 5$$



name

date

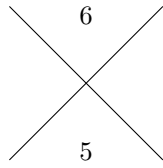
period

Batch 504f5070

Criss Cross Game

Version 22

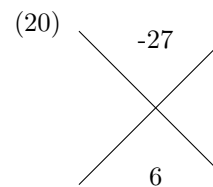
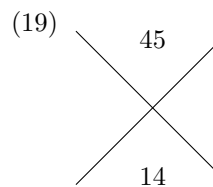
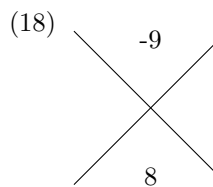
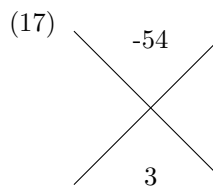
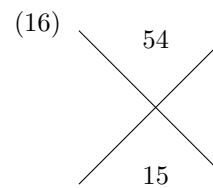
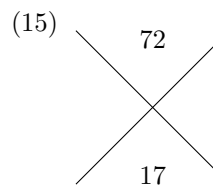
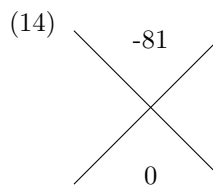
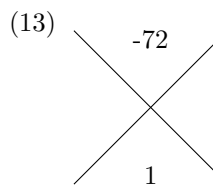
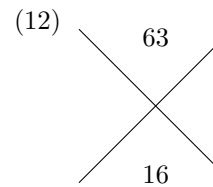
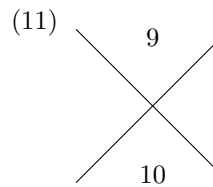
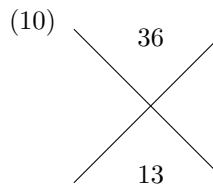
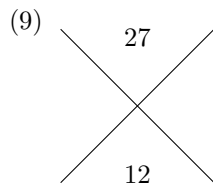
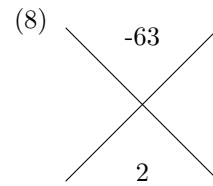
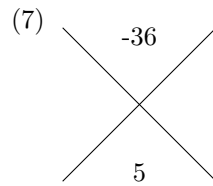
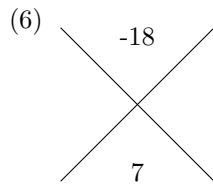
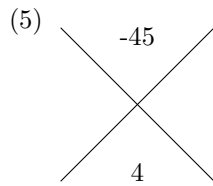
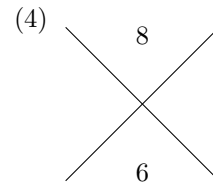
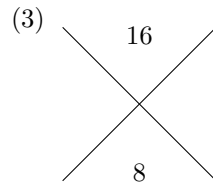
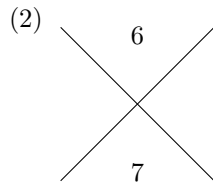
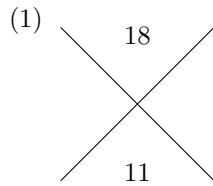
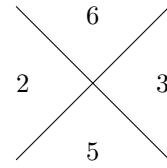
Example



Find two numbers whose product equals the top and whose sum equals the bottom.

$$2 \times 3 = 6$$

$$2 + 3 = 5$$



name

date

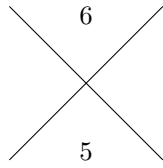
period

Batch 504f5070

Criss Cross Game

Version 23

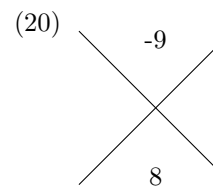
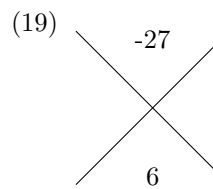
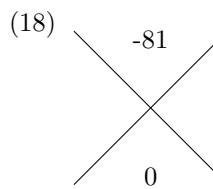
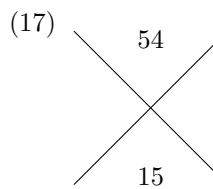
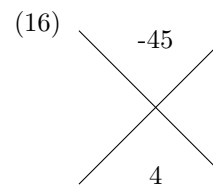
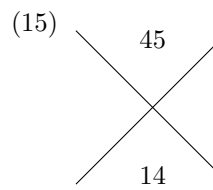
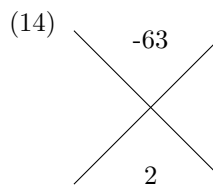
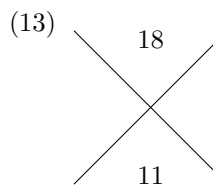
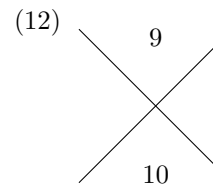
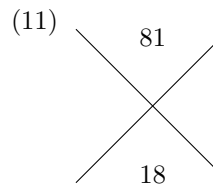
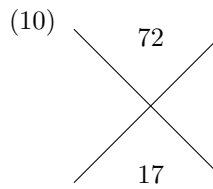
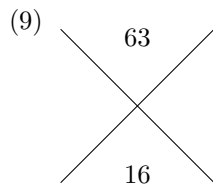
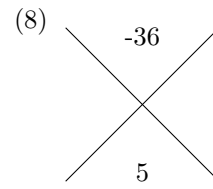
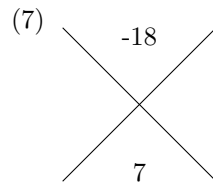
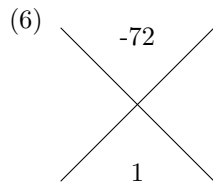
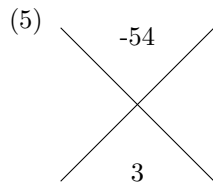
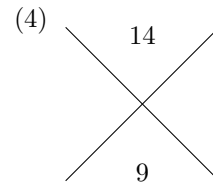
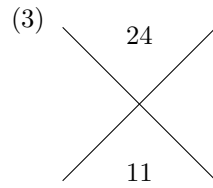
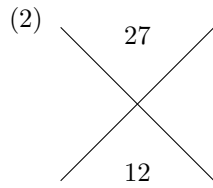
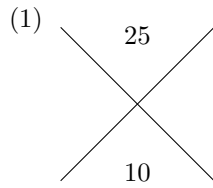
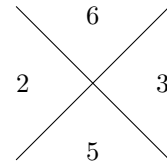
Example



Find two numbers whose product equals the top and whose sum equals the bottom.

$$2 \times 3 = 6$$

$$2 + 3 = 5$$



name

date

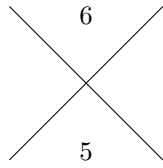
period

Batch 504f5070

Criss Cross Game

Version 24

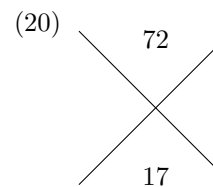
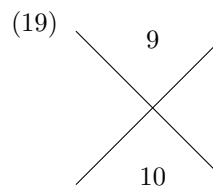
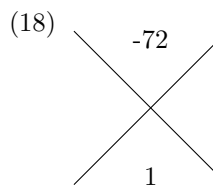
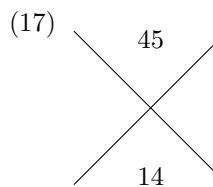
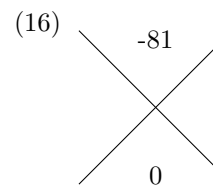
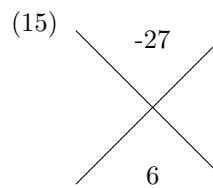
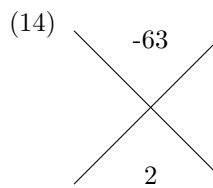
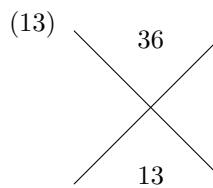
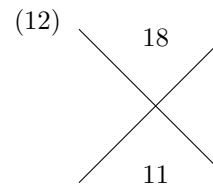
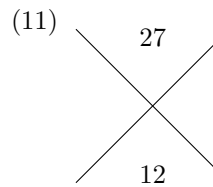
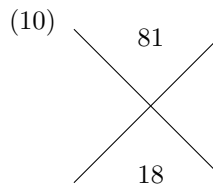
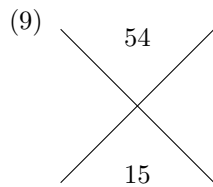
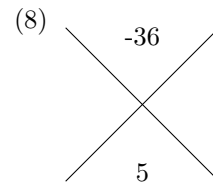
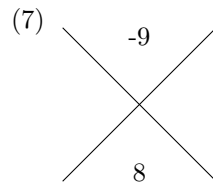
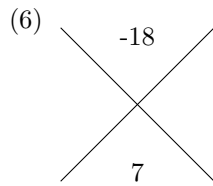
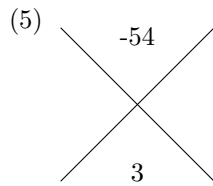
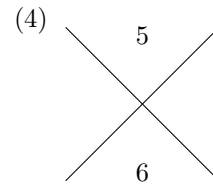
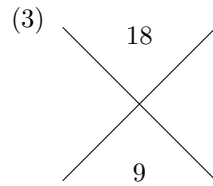
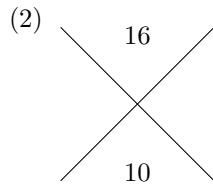
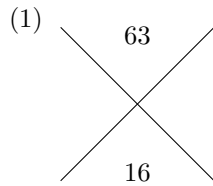
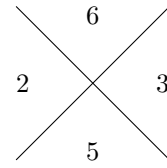
Example



Find two numbers whose product equals the top and whose sum equals the bottom.

$$2 \times 3 = 6$$

$$2 + 3 = 5$$



name

date

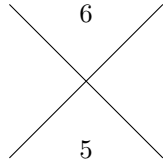
period

Batch 504f5070

Criss Cross Game

Version 25

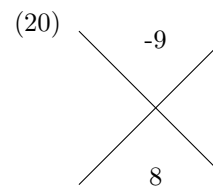
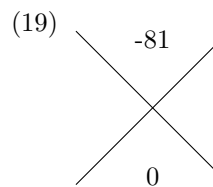
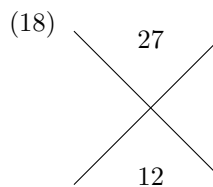
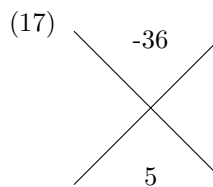
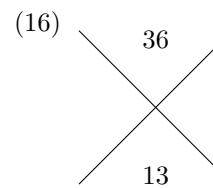
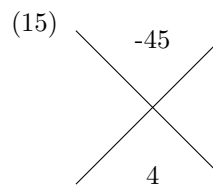
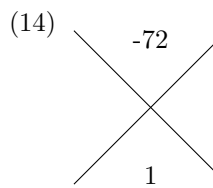
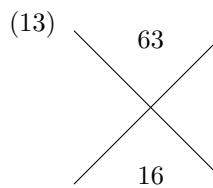
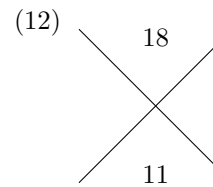
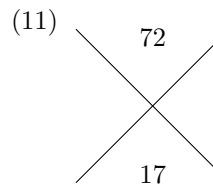
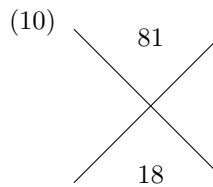
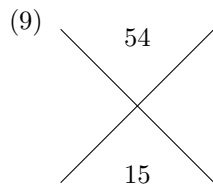
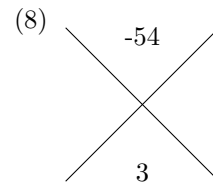
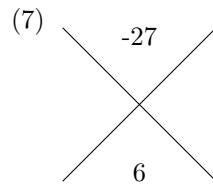
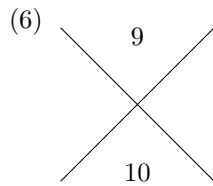
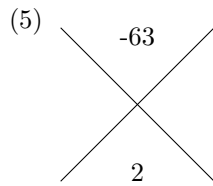
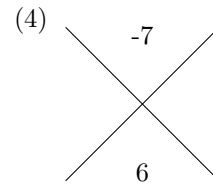
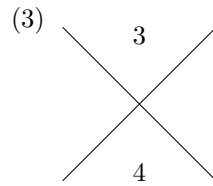
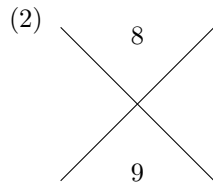
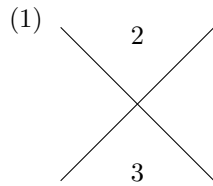
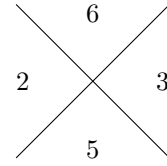
Example



Find two numbers whose product equals the top and whose sum equals the bottom.

$$2 \times 3 = 6$$

$$2 + 3 = 5$$



Answers are in pairs: a,b and b,a are both correct.

Version 1

(1) 2 8	(2) 4 8	(3) 8 9	(4) 1 9
(5) -6 9	(6) -9 9	(7) -3 9	(8) -5 9
(9) 9 9	(10) 4 9	(11) 3 9	(12) 6 9
(13) 5 9	(14) -2 9	(15) -4 9	(16) -1 9
(17) 7 9	(18) 2 9	(19) -7 9	(20) -9 9

Version 2

(1) -1 5	(2) 6 8	(3) 7 9	(4) 6 6
(5) -3 9	(6) -2 9	(7) -9 9	(8) -7 9
(9) 9 9	(10) 3 9	(11) 6 9	(12) 1 9
(13) -8 9	(14) 2 9	(15) 5 9	(16) -4 9
(17) 4 9	(18) -1 9	(19) -5 9	(20) -6 9

Version 3

(1) -1 9	(2) 6 9	(3) 4 5	(4) 3 4
(5) -8 9	(6) -3 9	(7) -9 9	(8) -2 9
(9) 9 9	(10) 8 9	(11) 2 9	(12) 5 9
(13) -7 9	(14) -5 9	(15) -4 9	(16) 4 9
(17) 1 9	(18) -6 9	(19) 7 9	(20) -9 9

Version 4

(1) -1 8	(2) 5 9	(3) 4 6	(4) 8 9
(5) -8 9	(6) 1 9	(7) -6 9	(8) -7 9
(9) 4 9	(10) 6 9	(11) 7 9	(12) 2 9
(13) -3 9	(14) -2 9	(15) 3 9	(16) -9 9
(17) -5 9	(18) 9 9	(19) -4 9	(20) -9 9

Version 5

(1) 5 5	(2) 2 8	(3) 1 8	(4) -1 4
(5) -2 9	(6) -7 9	(7) -6 9	(8) -9 9
(9) 5 9	(10) 2 9	(11) 9 9	(12) 7 9
(13) 8 9	(14) -4 9	(15) 1 9	(16) -1 9
(17) -3 9	(18) -5 9	(19) 3 9	(20) 4 9

Version 6

(1) 8 9	(2) 2 4	(3) 4 7	(4) -1 9
(5) -7 9	(6) -2 9	(7) -9 9	(8) -6 9
(9) 4 9	(10) 6 9	(11) 9 9	(12) 5 9
(13) 2 9	(14) 1 9	(15) 7 9	(16) -5 9
(17) 3 9	(18) -4 9	(19) -3 9	(20) -9 9

Version 7

(1) 1 4	(2) 1 8	(3) 3 8	(4) 6 8
(5) -1 9	(6) -9 9	(7) -8 9	(8) -6 9
(9) 7 9	(10) 3 9	(11) 5 9	(12) 9 9
(13) 6 9	(14) -7 9	(15) -3 9	(16) -2 9
(17) 2 9	(18) -4 9	(19) -5 9	(20) 8 9

Version 8

(1) 2 9	(2) 6 9	(3) 5 9	(4) 3 3
(5) 1 9	(6) -3 9	(7) -6 9	(8) -7 9
(9) 7 9	(10) 9 9	(11) 3 9	(12) 8 9
(13) -5 9	(14) -8 9	(15) -4 9	(16) 4 9
(17) -1 9	(18) -2 9	(19) -9 9	(20) -9 9

Version 9

(1) 4 9	(2) 4 5	(3) -1 5	(4) 3 8
(5) -7 9	(6) 1 9	(7) -2 9	(8) -8 9
(9) 3 9	(10) 2 9	(11) 5 9	(12) 9 9
(13) 7 9	(14) 8 9	(15) -3 9	(16) -5 9
(17) 6 9	(18) -1 9	(19) -6 9	(20) -9 9

Version 10

(1) 2 5	(2) 5 8	(3) 4 7	(4) 8 9
(5) -9 9	(6) 1 9	(7) -6 9	(8) -5 9
(9) 6 9	(10) 3 9	(11) 7 9	(12) 4 9
(13) 5 9	(14) -7 9	(15) -8 9	(16) -2 9
(17) 2 9	(18) -4 9	(19) 9 9	(20) -1 9

Version 11

(1) 2 9	(2) 1 7	(3) 3 6	(4) 4 4
(5) 1 9	(6) -9 9	(7) -4 9	(8) -1 9
(9) 6 9	(10) 7 9	(11) 5 9	(12) 3 9
(13) 8 9	(14) -3 9	(15) 4 9	(16) -7 9
(17) -2 9	(18) 9 9	(19) -5 9	(20) -6 9

Version 12

(1) 3 6	(2) 3 9	(3) 4 4	(4) 3 7
(5) -5 9	(6) 1 9	(7) -7 9	(8) -2 9
(9) 2 9	(10) 8 9	(11) 7 9	(12) 6 9
(13) -3 9	(14) 9 9	(15) 5 9	(16) -1 9
(17) -9 9	(18) 4 9	(19) -8 9	(20) -6 9

Version 13

(1) 5 7	(2) 7 9	(3) 6 7	(4) -1 3
(5) -2 9	(6) -7 9	(7) -6 9	(8) -8 9
(9) 8 9	(10) 5 9	(11) 1 9	(12) 6 9
(13) -1 9	(14) -4 9	(15) -5 9	(16) 4 9
(17) -9 9	(18) 3 9	(19) 2 9	(20) 9 9

Version 14

(1) 9 9	(2) 5 7	(3) 1 9	(4) 5 8
(5) -6 9	(6) -7 9	(7) -1 9	(8) -9 9
(9) 7 9	(10) 8 9	(11) 2 9	(12) 6 9
(13) -8 9	(14) -5 9	(15) -2 9	(16) -3 9
(17) 5 9	(18) 4 9	(19) 3 9	(20) -9 9

Version 15

(1) 3 9	(2) 6 6	(3) 2 4	(4) 7 8
(5) -3 9	(6) -5 9	(7) -6 9	(8) -8 9
(9) 7 9	(10) 8 9	(11) 9 9	(12) 2 9
(13) 1 9	(14) -7 9	(15) 5 9	(16) 4 9
(17) -1 9	(18) -4 9	(19) -9 9	(20) -2 9

Version 16

(1) 7 9	(2) 3 3	(3) 5 5	(4) 4 7
(5) -8 9	(6) 1 9	(7) -5 9	(8) -3 9
(9) 3 9	(10) 5 9	(11) 4 9	(12) 9 9
(13) 8 9	(14) -6 9	(15) -4 9	(16) -7 9
(17) -2 9	(18) 2 9	(19) 6 9	(20) -9 9

Version 17

(1) 8 9	(2) 6 8	(3) 6 6	(4) 5 9
(5) -1 9	(6) -2 9	(7) -5 9	(8) -8 9
(9) 2 9	(10) 9 9	(11) 4 9	(12) 7 9
(13) -4 9	(14) -9 9	(15) -6 9	(16) 3 9
(17) -7 9	(18) 6 9	(19) -3 9	(20) -9 9

Version 18

(1) 4 7	(2) 5 7	(3) 4 5	(4) 1 3
(5) -8 9	(6) -5 9	(7) -1 9	(8) -4 9
(9) 9 9	(10) 4 9	(11) 3 9	(12) 1 9
(13) -7 9	(14) -6 9	(15) 8 9	(16) 7 9
(17) 6 9	(18) -2 9	(19) 2 9	(20) 5 9

Version 19

(1) 4 7	(2) 2 7	(3) 6 8	(4) 3 7
(5) -4 9	(6) -3 9	(7) -1 9	(8) 1 9
(9) 8 9	(10) 5 9	(11) 2 9	(12) 3 9
(13) -9 9	(14) -8 9	(15) -5 9	(16) 6 9
(17) -2 9	(18) 9 9	(19) 4 9	(20) 7 9

Version 20

(1) 3 9	(2) -1 4	(3) -1 6	(4) 7 8
(5) 1 9	(6) -1 9	(7) -6 9	(8) -9 9
(9) 4 9	(10) 9 9	(11) 7 9	(12) 8 9
(13) 5 9	(14) -2 9	(15) 2 9	(16) 6 9
(17) -7 9	(18) -8 9	(19) -4 9	(20) -3 9

Version 21

(1) 3 4	(2) 1 7	(3) 2 8	(4) 4 5
(5) -7 9	(6) -2 9	(7) -6 9	(8) -9 9
(9) 3 9	(10) 1 9	(11) 2 9	(12) 9 9
(13) 6 9	(14) 4 9	(15) 8 9	(16) -3 9
(17) 7 9	(18) -5 9	(19) -1 9	(20) -8 9

Version 22

(1) 2 9	(2) 1 6	(3) 4 4	(4) 2 4
(5) -5 9	(6) -2 9	(7) -4 9	(8) -7 9
(9) 3 9	(10) 4 9	(11) 1 9	(12) 7 9
(13) -8 9	(14) -9 9	(15) 8 9	(16) 6 9
(17) -6 9	(18) -1 9	(19) 5 9	(20) -3 9

Version 23

(1) 5 5	(2) 3 9	(3) 3 8	(4) 2 7
(5) -6 9	(6) -8 9	(7) -2 9	(8) -4 9
(9) 7 9	(10) 8 9	(11) 9 9	(12) 1 9
(13) 2 9	(14) -7 9	(15) 5 9	(16) -5 9
(17) 6 9	(18) -9 9	(19) -3 9	(20) -1 9

Version 24

(1) 7 9	(2) 2 8	(3) 3 6	(4) 1 5
(5) -6 9	(6) -2 9	(7) -1 9	(8) -4 9
(9) 6 9	(10) 9 9	(11) 3 9	(12) 2 9
(13) 4 9	(14) -7 9	(15) -3 9	(16) -9 9
(17) 5 9	(18) -8 9	(19) 1 9	(20) 8 9

Version 25

(1) 1 2	(2) 1 8	(3) 1 3	(4) -1 7
(5) -7 9	(6) 1 9	(7) -3 9	(8) -6 9
(9) 6 9	(10) 9 9	(11) 8 9	(12) 2 9
(13) 7 9	(14) -8 9	(15) -5 9	(16) 4 9
(17) -4 9	(18) 3 9	(19) -9 9	(20) -1 9